

**SANT NIRANKARI PUBLIC SCHOOL, GOVINDPURI**  
**TERM II, ASSIGNMENT-2 (2018-2019)**  
**SUBJECT-ENGLISH**  
**CLASS-II**

**NAME-** \_\_\_\_\_ **DATE-** \_\_\_\_\_ **ROLL NO.-** \_\_\_\_\_

---

**Q1. Use an action word from the box to complete each sentence appropriately:**

<b>Washed</b>	<b>sang</b>	<b>read</b>	<b>rises</b>	<b>examined</b>
<b>Climbed</b>	<b>barks</b>	<b>died</b>	<b>played</b>	<b>bake</b>

- i. Pooja \_\_\_\_\_ the song beautifully.
- ii. Mom \_\_\_\_\_ my football uniform last night.
- iii. The children \_\_\_\_\_ at the playground.
- iv. Mary was very tired after she \_\_\_\_\_ to the peak of the mountain.
- v. I love to \_\_\_\_\_ books.
- vi. She \_\_\_\_\_ in an accident last year.
- vii. The Sun \_\_\_\_\_ in the east.
- viii. Dog \_\_\_\_\_ at the stranger.
- ix. It takes time to \_\_\_\_\_ the cake.
- x. The doctor \_\_\_\_\_ his patient quickly.

**Q2. Make sentences using verbs given:**

- i. Draw- \_\_\_\_\_
- ii. Catch- \_\_\_\_\_
- iii. Bend- \_\_\_\_\_
- iv. Drink- \_\_\_\_\_

v. Push- \_\_\_\_\_

vi. Clean- \_\_\_\_\_

vii. Dance- \_\_\_\_\_

viii. Sail- \_\_\_\_\_

ix. Read- \_\_\_\_\_

x. Cook- \_\_\_\_\_

**SANT NIRANKARI PUBLIC SCHOOL**  
**TERM II, ASSIGNMENT-2 (2018-2019)**  
**SUBJECT- MATHS**  
**CLASS - II**

**NAME-** \_\_\_\_\_ **DATE-** \_\_\_\_\_ **ROLL NO.-** \_\_\_\_\_

**Q1. Count the money:**

1.  \_\_\_\_\_

2.  \_\_\_\_\_

3.  \_\_\_\_\_

4.  \_\_\_\_\_

5.  \_\_\_\_\_

**Q2. Write in words:**

1. ₹ 112.56 paise = \_\_\_\_\_

2. ₹ 405.67 paise = \_\_\_\_\_

3. ₹ 89.01 paise = \_\_\_\_\_

4. ₹ 500 = \_\_\_\_\_

5. ₹ 200.50 paise = \_\_\_\_\_

**Q3. Solve:**

$$\begin{array}{r} \text{(a) ₹ P} \\ 25 \quad 25 \\ + 5 \quad 50 \\ \hline \hline \hline \end{array}$$

$$\begin{array}{r} \text{(b) ₹ P} \\ 90 \quad 00 \\ + 45 \quad 50 \\ \hline \hline \hline \end{array}$$

$$\begin{array}{r} \text{(c) ₹ P} \\ 84 \quad 50 \\ + 48 \quad 25 \\ \hline \hline \hline \end{array}$$

$$\begin{array}{r} \text{(d) ₹ P} \\ 75 \quad 50 \\ - 35 \quad 50 \\ \hline \hline \hline \end{array}$$

$$\begin{array}{r} \text{(e) ₹ P} \\ 77 \quad 40 \\ - 42 \quad 60 \\ \hline \hline \hline \end{array}$$

$$\begin{array}{r} \text{(f) ₹ P} \\ 25 \quad 00 \\ - 10 \quad 50 \\ \hline \hline \hline \end{array}$$

**Q4.** Ankur buys a chocolate for ₹32. If he gives ₹100, how much money should he get back?

Ans.

**Q5.** Aniket bought his school bag for ₹175.00 and a water bottle for ₹65.00. How much money did he spend in all?

Ans.

**Q6.** Robin and John have the following coins:

Robin: 3 coins of ₹10, 5 coins of ₹5, 3 coins of ₹2, 5 coins of ₹1

John: 4 coins of ₹10, 3 coins of ₹5, 1 coin of ₹2, 8 coins of ₹1

Who has more money and by how much?

Ans.

**SANT NIRANKARI PUBLIC SCHOOL**  
**TERM II, ASSIGNMENT-2 (2018-2019)**  
**SUBJECT- EVS**  
**CLASS - II**

**NAME-** \_\_\_\_\_ **DATE-** \_\_\_\_\_ **ROLL NO. -** \_\_\_\_\_

---

**1. Fill the appropriate number of wheels in each transport -**

- i. Motorcycle \_\_\_\_\_
- ii. Bus \_\_\_\_\_
- iii. Cycle \_\_\_\_\_
- iv. Car \_\_\_\_\_
- v. Aeroplane \_\_\_\_\_

**2. Answer in one word –**

- i. Examples of land transport  
\_\_\_\_\_
- ii. Examples of water transport  
\_\_\_\_\_





**3. Rearrange the jumbled words and make transport name –**

- i. USB \_\_\_\_\_
- ii. AOTB \_\_\_\_\_
- iii. HSIP \_\_\_\_\_
- iv. LIGDRE \_\_\_\_\_
- v. ELIHCOTEPR \_\_\_\_\_

**4. State True or False –**

- i. Vehicles help us to move from one place to another. (            )
- ii. Ship is an air transport. (            )
- iii. Glider has no engine. (            )

**5. Identify the pictures and name them-**



**6. Circle the odd word –**

- |               |                 |           |            |
|---------------|-----------------|-----------|------------|
| i. Ship       | Railway station | Port      | Taxi stand |
| ii. Aeroplane | Taxi stand      | Bus stand | Airport    |